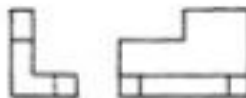

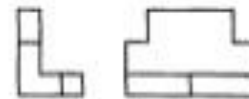
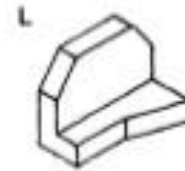
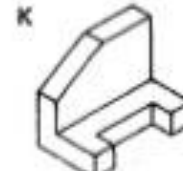
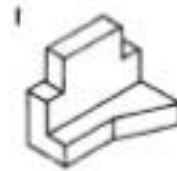
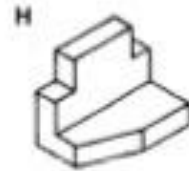
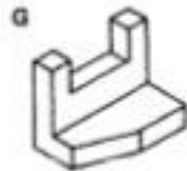


**Orthographic Projection Isometric Matching Exercise 7**

EXERCISES. Study the two types and complete the table by matching the numbered orthographic drawings with the same isometric view.



A	B	C	D	E	F	G	H	I	J

DRG.

ORTHOGRAPHIC PROJECTION

EXERCISE 7